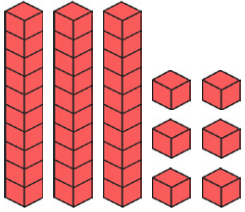


Year 1 Maths Activity Mat

6

Section 1

Write the number in the box.



Section 2

Can I buy the sunglasses?



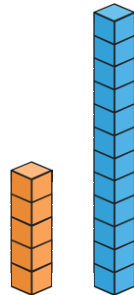
Section 3

What numbers come next?

22	20	18			
----	----	----	--	--	--

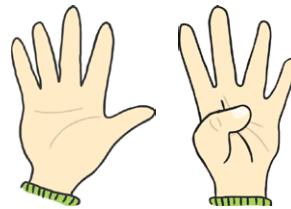
Section 4

How many cubes taller is the blue tower than the orange tower?



Section 5

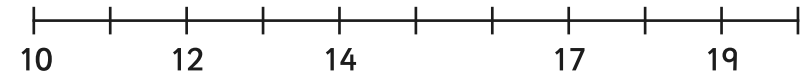
How many fingers are there?



Section 6

Put these numbers on the number line.

11 18 13 16 15 20



Section 7

12 is 1 more than

15 is 1 more than


Section 8

Archie has 5 sausages on his plate.

He eats one.

How many are left?

Write a number sentence so show this.

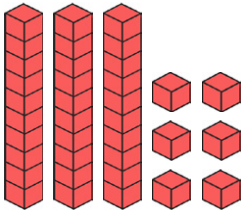


Year 1 Maths Activity Mat: 6

Answers

Section 1

Write the number in the box.



36

Section 2

Can I buy the sunglasses?



no

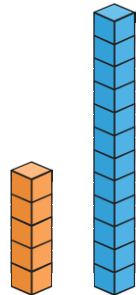
Section 3

What numbers come next?

22	20	18	16	14	12
----	----	----	----	----	----

Section 4

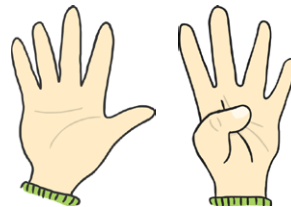
How many cubes taller is the blue tower than the orange tower?



7

Section 5

How many fingers are there?

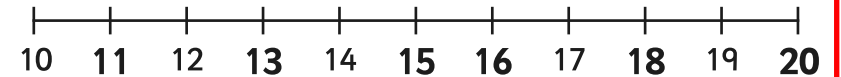


9

Section 6

Put these numbers on the number line.

11 18 13 16 15 20



Section 7

12 is 1 more than

11

15 is 1 more than

14


Section 8

Archie has 5 sausages on his plate.

He eats one.

How many are left?

Write a number sentence so show this.



$$5 - 1 = 4$$